

# SHIKSHA CLASSES, BHANDARA

## FULL TEST-8

CHEMISTRY , PHYSICS, BIOLOGY

Time : - 3 Hours

Max. Marks:- 720

Date : .....

### INSTRUCTIONS :

1. The test is of 3 hours duration.
2. The Test Booklet consists of 180 questions. The maximum marks are 720.
3. There are three parts in the question paper A, B, C consisting of Chemistry, Physics having 45 questions each and Biology having 90 questions of equal weightage. Each question is allotted 4 (four) marks for each correct response.  $\frac{1}{4}$  (one fourth) marks will be deducted for indicating incorrect response of each question. No deduction from the total score will be made if no response is indicated for an item in the answer sheet.
4. There is only one correct response for each question. Filling up more than one response in each question will be treated as wrong response and marks for wrong response will be deducted accordingly.

Name : .....

Address : .....

.....

Phone/Mobile No. ....

Roll No. ....

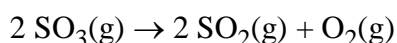
## PART A – CHEMISTRY

**Q.1** A balloon occupies a volume of 1.0 liter when it contains 0.16 grams of helium at 37°C and 1 atm pressure. If helium is added to the balloon until it contains 0.80 grams while pressure and temperature are kept constant, what will be the new volume of the balloon?

- (1) 0.50 liters                      (2) 1.0 liters  
(3) 2.0 liters                        (4) 5.0 liters

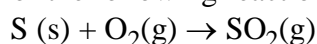
**Q.2**  $2\text{S(s)} + 3\text{O}_2\text{(g)} \rightarrow 2\text{SO}_3\text{(g)}$

$$\Delta H = +800 \text{ kJ / mol}$$



$$\Delta H = -200 \text{ kJ / mol}$$

Based on the information given above, what is  $\Delta H$  for the following reaction?



- (1) 300 kJ                              (2) 500 kJ  
(3) 600 kJ                              (4) 1,000 kJ

**Q.3** When benzene and toluene are mixed together, they form an ideal solution. If benzene has a higher vapour pressure than toluene, then the vapour pressure of a solution that contains an equal number of moles of benzene and toluene will be

- (1) higher than the vapour pressure of benzene.  
(2) equal to the vapour pressure of benzene.  
(3) lower than the vapour pressure of benzene and higher than the vapour pressure of toluene.  
(4) equal to the vapour pressure of toluene.

**Q.4**  $\text{H}_2\text{(g)} + \text{CO}_2\text{(g)} \rightleftharpoons \text{H}_2\text{O(g)} + \text{CO(g)}$

Initially, a sealed vessel contained only  $\text{H}_2\text{(g)}$  with a partial pressure of 6 atm and  $\text{CO}_2\text{(g)}$  with a partial pressure of 4 atm. The reaction above was allowed to come to equilibrium at a temperature of 700 K. At equilibrium, the partial pressure due to  $\text{CO(g)}$  was found to be 2 atm. What is the value of the equilibrium constant  $K_p$ , for the reaction?

- (1) 1/24                                  (2) 1/6  
(3) 1/4                                    (4) 1/2

**Q.5**  $\text{H}_2\text{(g)} + \text{I}_2\text{(g)} \rightarrow 2\text{HI(g)}$

When the reaction given above takes place in a sealed isothermal container, the rate law is

$$\text{Rate} = k [\text{H}_2] [\text{I}_2]$$

If a mole of  $\text{H}_2$  gas is added to the reaction chamber, which of the following will be true?

- (1) The rate of reaction and the rate constant will increase.  
(2) The rate of reaction and the rate constant will not change.  
(3) The rate of reaction will increase and the rate constant will decrease.  
(4) The rate of reaction will increase and the rate constant will not change.

**Q.6** Elements of which group form anions most readily:

- (1) Oxygen family                      (2) Nitrogen group  
(3) Halogens                              (4) Alkali metals

**Q.7** Which statement is correct :

- (1) All the compounds having polar bonds, have dipole moment.  
(2)  $\text{SO}_2$  is non-polar.  
(3)  $\text{H}_2\text{O}$  molecule is non polar, having polar bonds  
(4)  $\text{PH}_3$  is polar molecule having non polar bonds

**Q.8** Correct order of volatility is :

- (1)  $\text{HF} > \text{HCl} > \text{HBr} > \text{HI}$   
(2)  $\text{HCl} > \text{HBr} > \text{HI} > \text{HF}$   
(3)  $\text{HI} > \text{HBr} > \text{HCl} > \text{HF}$   
(4)  $\text{HBr} < \text{HCl} < \text{HI} < \text{HF}$

**Q.9** The dipole moment of  $\text{H}_2\text{O}_2$  is 2.1 D. This indicates that the structure of  $\text{H}_2\text{O}_2$  is :

- (1) Linear                                  (2) Non-linear  
(3) Symmetrical                          (4) None

**Q.10** Consider the oxy acids  $\text{HClO}_n$  series, here value of n is 1 to 4. Then incorrect statement regarding these oxy acids is

- (1) acidic character of oxy acids increases with increasing value of n.

SPACE FOR ROUGH WORK

- (2) oxidising power of oxy acids increases with decreasing value of n.  
 (3) thermal stability of oxy acids decreases with increasing value of n.  
 (4) Cl-O bond order decreases with decreasing value of n.

**Q.11** Ammonia can be dried by –

- (1) Conc.  $\text{H}_2\text{SO}_4$  (2)  $\text{P}_4\text{O}_{10}$   
 (3) CaO (4) Anhydrous  $\text{CaCl}_2$

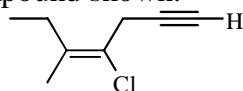
**Q.12** Which of the following product is not formed by the reaction of  $\text{PH}_4\text{I}$  and  $\text{KOH}$  :

- (1) KI (2)  $\text{PH}_3$   
 (3)  $\text{H}_2\text{O}$  (4)  $\text{P}_2\text{O}_3$

**Q.13** Which of the following will be true when a pure substance in liquid phase freezes spontaneously?

- (1)  $\Delta G$ ,  $\Delta H$ , and  $\Delta S$  are all positive.  
 (2)  $\Delta G$ ,  $\Delta H$ , and  $\Delta S$  are all negative.  
 (3)  $\Delta G$  and  $\Delta H$  are negative, but  $\Delta S$  is positive.  
 (4)  $\Delta G$  and  $\Delta S$  are negative, but  $\Delta H$  is positive.

**Q.14** What is the correct IUPAC name for the compound shown:

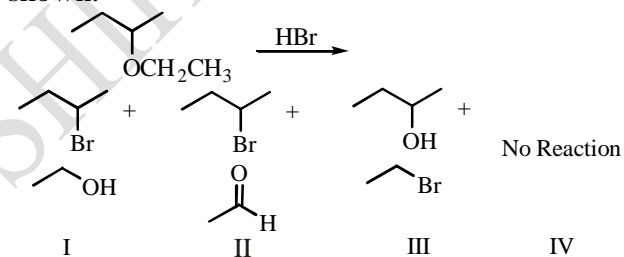


- (1) E-4-chloro-3-methyl-3-hepten-6-yne  
 (2) E-4-chloro-5-methyl-4-hepten-1-yne  
 (3) Z-4-chloro-3-methyl-3-hepten-6-yne  
 (4) Z-4-chloro-5-methyl-4-hepten-1-yne

**Q.15** What is the product of the reaction of an alkene with potassium permanganate ( $\text{KMnO}_4$ )?

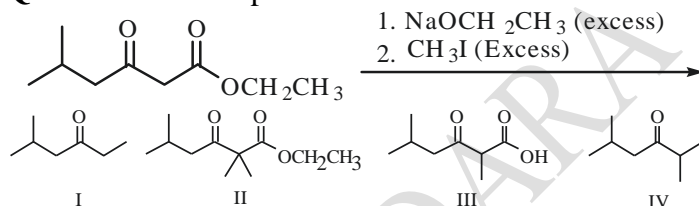
- (1) An anti diol (2) An alcohol  
 (3) A syn diol (4) A cis dihalide

**Q.16** Predict the correct product(s) for the reaction shown:



- (1) I (2) II  
 (3) III (4) IV

**Q.17** What is the product of the reaction shown?

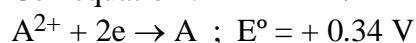


- (1) I (2) II  
 (3) III (4) IV

**Q.18** Which statement about the Wittig reaction is incorrect?

- (1) The Wittig reaction is a method for converting aldehydes and ketones into alkenes.  
 (2) Phosphonium ylides act as the nucleophile in the reaction.  
 (3) The precursor to a phosphonium ylide is formed from the  $\text{S}_{\text{N}}1$  attack of phosphorus on an alkyl halide so using secondary and tertiary alkyl halides is best.  
 (4) Once the phosphorus has attacked the halide, a strong base like butyl lithium is used to deprotonate the carbon bonded to the phosphorus resulting in the formation of the phosphonium ylide.

**Q.19** Cell equation :  $\text{A} + 2\text{B}^+ \rightarrow \text{A}^{2+} + 2\text{B}$



and  $\log_{10} K = 15.6$  at 300 K for cell reactions

Find  $E^\circ$  for  $\text{B}^+ + \text{e} \rightarrow \text{B}$

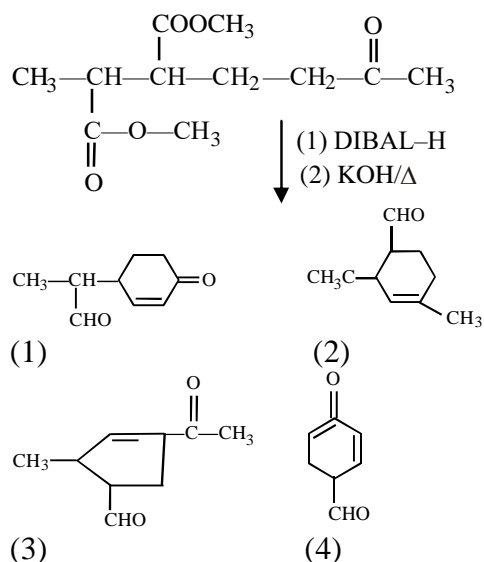
Given

$$\left[ \frac{2.303 RT}{nF} = 0.059 \right]_{\text{at } 300 \text{ K}}$$

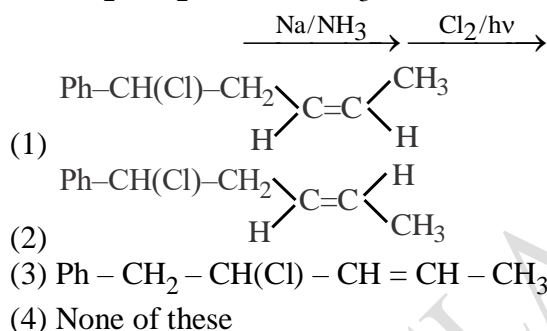
- (1) 0.80 (2) 1.26  
 (3) -0.54 (4) +0.94

SPACE FOR ROUGH WORK

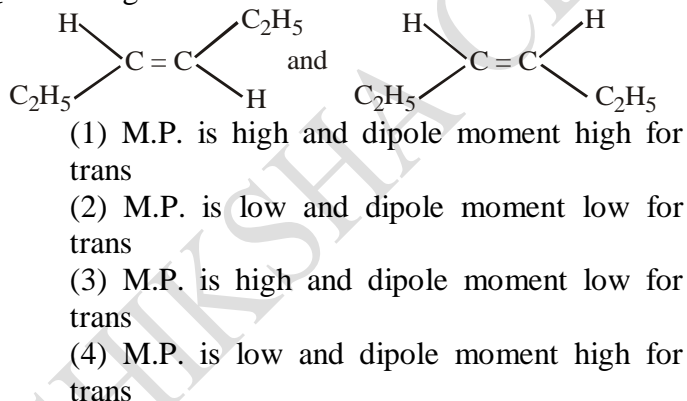
**Q.20**



**Q.21**  $\text{Ph}-\text{CH}_2-\text{CH}_2-\text{C}\equiv\text{C}-\text{CH}_3$



**Q.22** For geometric isomers of 3-hexene :

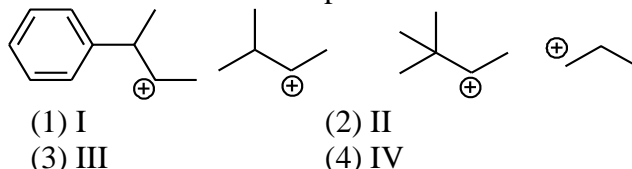


**Q.23** The reaction shown is a step from the mechanism of the addition of HX over an alkene without the arrows draw in. Which choice below correctly describes how the arrows should be drawn in?

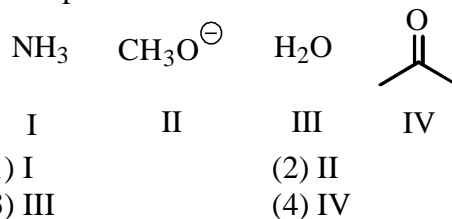


- (1) A double headed arrow drawn from the least substituted carbon of the alkene to the hydrogen of HBr; a double headed arrow drawn from the H-Br bond to the bromine.
- (2) A double headed arrow drawn from the pi bond of the alkene to the hydrogen of HBr; a double headed arrow drawn from the H-Br bond to the bromine.
- (3) A double headed arrow drawn from the most substituted carbon of the alkene to the hydrogen of HBr; a double headed arrow drawn from the H-Br bond to the bromine.
- (4) A single headed arrow drawn from the least substituted carbon of the alkene to the hydrogen of HBr; a double headed arrow drawn from the H-Br bond to the bromine.

**Q.24** Which carbocation intermediate shown will undergo a rearrangement and form the most stable carbocation compared to the others?



**Q.25** Which of the following would make a poor nucleophile?



**Q.26** Arrange the following compounds in the increasing order of their acidic strength:

- i. m-nitrophenol                      ii. m-cresol  
 iii. phenol                                iv. m-chlorophenol
- (1) iii < ii < i < iv                      (2) ii < iv < iii < i  
 (3) ii < iii < iv < i                      (4) ii < iii < i < iv

SPACE FOR ROUGH WORK

**Q.27** The number of  $R_2Si(OH)_2$  units required to prepare a silicone polymer containing 10 Si – O – Si linkages is

- (1) 1 (2) 9  
(3) 3 (4) 8

**Q.28** The outer electron configuration of Gd (Atomic No: 64) is  $4f^7 5d^X 6s^2$ . Find the value of X.

- (1) 1 (2) 2  
(3) 3 (4) 4

**Q.29** What will be the solubility product of  $AX_3$  ?

- (1)  $27 S^4$  (2)  $4S^3$   
(3)  $36 S^4$  (4)  $9S^3$

**Q.30** On the basis of standard electrode potential of redox couples given below, find out which of the following is the strongest oxidising agent.

( $E^\circ$  values:  $Fe^{3+} | Fe^{2+} = + 0.77 V$ ;  
 $I_2(s) | I^- = + 0.54 V$ ;  $Cu^{2+} | Cu = + 0.34 V$  ;  
 $Ag^+ | Ag = + 0.80 V$ )

- (1)  $Fe^{3+}$  (2)  $I_2(s)$   
(3)  $Cu^{2+}$  (4)  $Ag^+$

**Q.31** Which of the following oxoacids of phosphorus is a reducing agent and a monobasic acid as well?

- (1)  $H_4P_2O_5$  (2)  $HPO_3$   
(3)  $H_3PO_3$  (4)  $H_3PO_2$

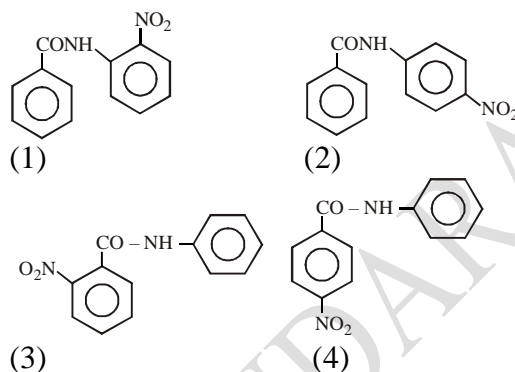
**Q.32** Calculate the overall complex dissociation equilibrium constant for the  $[Cu(NH_3)_4]^{2+}$  ions, given that stability constant ( $\beta_4$ ) for this complex is  $2.1 \times 10^{13}$ .

- (1)  $8.27 \times 10^{-13}$  (2)  $4.76 \times 10^{-14}$   
(3)  $2.39 \times 10^{-7}$  (4)  $1.83 \times 10^{14}$

**Q.33** Choose the correctly paired gaseous cation and its magnetic (spin only) moment (in B.M.)

- (1)  $Ti^{2+}$ , 3.87 B.M. (2)  $Cr^{2+}$ , 4.90 B.M.  
(3)  $Co^{3+}$ , 3.87 B.M. (4)  $Mn^{2+}$ , 4.90 B.M.

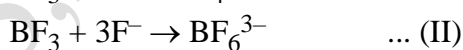
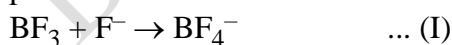
**Q.34** Which is the major product formed when  $C_6H_5CONHC_6H_5$  undergoes nitration?



**Q.35** Maltose is made of the units

- (1)  $\alpha$ -D glucose and  $\beta$ -D glucose  
(2)  $\alpha$ -D glucose and  $\beta$ -D fructose  
(3)  $\alpha$ -D glucose and  $\alpha$ -D glucose  
(4)  $\alpha$ -D glucose and  $\beta$ -D galactose

**Q.36** Which of the following reactions does not take place?



- (1) Only (I) (2) Only (II)  
(3) Only (III) (4) Only (I) and (III)

**Q.37** Hydride of boron occurs as  $B_2H_6$  but  $B_2Cl_6$  does not exist. This is because

- (1)  $p\pi-d\pi$  back bonding is possible in  $B_2H_6$  but not in  $B_2Cl_6$ .  
(2) boron and hydrogen have almost equal values of electronegativity.  
(3) boron and chlorine have almost equal atomic sizes.  
(4) small hydrogen atoms can easily fit in between boron atoms but large chlorine atoms do not.

**Q.38** The first ionisation enthalpy of Na, Mg and Si are 496, 737, 776 kJ/mol respectively. What will be the first ionisation enthalpy potential of Al in kJ/mol?

- (1)  $> 766$  kJ/mol  
(2)  $> 496$  and  $< 737$  kJ  
(3)  $> 737$  and  $< 766$  kJ/mol  
(4)  $> 496$  kJ/mol

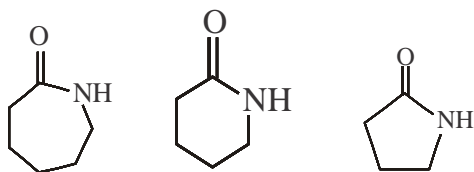
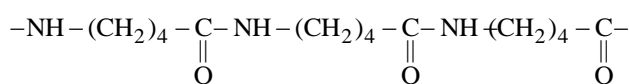
SPACE FOR ROUGH WORK

**Q.39** According to Hardy schulze law, the flocculating power of an ion increases with  
 (1) decrease in size (2) increase in size  
 (3) decrease in charge (4) increase in charge.

**Q.40** In hcp (ABAB...) and ccp (ABCABC...) structures made up of spheres of equal size, the volume occupied per sphere (including the empty spaces) is (a = radius of sphere):

- (1)  $5.66 a^3$  (2)  $1.33 a^3$   
 (3)  $2.66 a^3$  (4)  $7.40 a^3$

**Q.41** Which of the following is monomeric unit of the polymer Nylon-5?



- (1) (2) (3)  
 (4)



**Q.42** Choose the correct statement –

- (i) The melting points and solubility in water of amino acids are generally higher than that of the corresponding halo acids  
 (ii) Monosaccharides are carbohydrates that can be hydrolysed further to give simpler units of polyhydroxy aldehyde or ketone.  
 (iii) Reducing sugars are carbohydrates that reduce Fehling's solution and Tollen's reagent.  
 (iv) Glycogen is a carbohydrate (polysaccharide).

- (1) i, iii, iv (2) i, ii, iii  
 (3) ii, iii, iv (4) i, ii, iv

**Q.43** Arrange the following in increasing order of their basic strength :

- (i)  $\text{C}_2\text{H}_5\text{NH}_2$ , (ii)  $\text{C}_6\text{H}_5\text{NH}_2$   
 (iii)  $\text{NH}_3$  (iv)  $\text{C}_6\text{H}_5\text{CH}_2\text{NH}_2$   
 (v)  $(\text{C}_2\text{H}_5)_2\text{NH}$

- (1) (ii) < (iii) < (iv) < (i) < (v)  
 (2) (i) < (iii) < (iv) < (ii) < (v)  
 (3) (ii) < (iv) < (iii) < (i) < (v)  
 (4) (ii) < (iii) < (iv) < (v) < (i)

**Q.44** Choose the correct statement –

- (i)  $\text{Fe}^{2+}$  is stronger reducing agent than  $\text{Cr}^{2+}$   
 (ii) The most common oxidation state of Lanthanoids is +3.  
 (iii) The magnetic moment of  $\text{Ce}^{3+}$  ion is 1.73BM.

- (1) i, iii (2) ii, iii  
 (3) i, ii (4) i, ii, iii

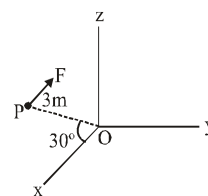
**Q.45** Amongst the following, the most stable complex is-

- (1)  $[\text{Fe}(\text{H}_2\text{O})_6]^{3+}$  (2)  $[\text{Fe}(\text{NH}_3)_6]^{3+}$   
 (3)  $[\text{Fe}(\text{C}_2\text{O}_4)_3]^{3-}$  (4)  $[\text{FeCl}_6]^{3-}$

## PART B – PHYSICS

**Q.46** A force  $F = 2.0\text{N}$  acts on a particle P in the xz-plane.

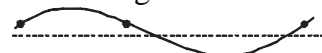
The force F is parallel to x-axis. The particle P (as shown in the figure) is at a distance 3m and the line



joining P with the origin make angle  $30^\circ$  with the x-axis. The magnitude of torque on P with respect to origin O (in N-m) is :

- (1) 2 (2) 3  
 (3) 4 (4) 5

**Q.47** The diagram below shows an instantaneous position of a string as a transverse progressive wave travels along it from left to right

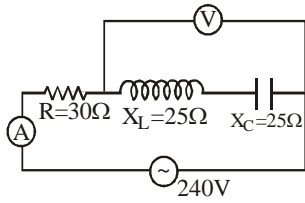


Which one of the following correctly shows the direction of the velocity of the points 1, 2 and 3 on the string.

- (1)  $1 \rightarrow$  ;  $2 \rightarrow$  ;  $3 \rightarrow$  (2)  $1 \rightarrow$  ;  $2 \leftarrow$  ;  $3 \rightarrow$   
 (3)  $1 \downarrow$  ;  $2 \downarrow$  ;  $3 \downarrow$  (4)  $1 \downarrow$  ;  $2 \uparrow$  ;  $3 \downarrow$

**Q.48** In the circuit shown in the figure neglecting source resistance the voltmeter and ammeter reading will respectively be :

SPACE FOR ROUGH WORK

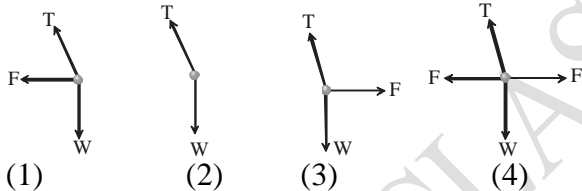
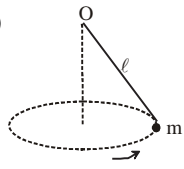


- (1) 0V, 3A                      (2) 150V, 3A  
 (3) 150V, 6A                    (4) 0V, 8A

**Q.49** Light of frequency  $4\nu_0$  is incident on the metal of the threshold frequency  $\nu_0$ . The maximum kinetic energy of the emitted photoelectrons is :

- (1)  $3h\nu_0$                       (2)  $2h\nu_0$   
 (3)  $\frac{3}{2}h\nu_0$                     (4)  $\frac{1}{2}h\nu_0$

**Q.50** A point mass  $m$  is suspended from a light thread of length  $\ell$ , fixed at  $O$ , is whirled in a horizontal circle at constant speed as shown. From your point of view, stationary with respect to the mass, the forces on the mass are :



**Q.51** Given  $\vec{A} = 4\hat{i} + 6\hat{j}$  and  $\vec{B} = 2\hat{i} + 3\hat{j}$  which of the following is correct :

- (1)  $\vec{A} \times \vec{B} = \vec{0}$   
 (2)  $\vec{A} \cdot \vec{B} = 24$   
 (3)  $\frac{|\vec{A}|}{|\vec{B}|} = \frac{1}{2}$   
 (4)  $\vec{A}$  and  $\vec{B}$  are antiparallel

**Q.52** A beam of light converges to a point P. A lens is placed in the path of convergent beam 12 cm from P. At what point does the beam converge if the lens is a concave lens of focal length 16 cm ?

- (1) 7.5 cm                      (2) 48 cm  
 (3) 30 cm                      (4) 7.1 cm

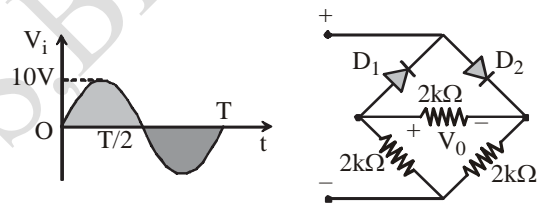
**Q.53** A uniform thick rope of length 5m is kept on frictionless surface and a force of 5N is applied to one of its end. Find tension in the rope at 1m from this end-

- (1) 1N                              (2) 3N  
 (3) 4N                              (4) 5N

**Q.54** Two slits separated by a distance of 1 mm are illuminated with red light of wavelength  $6.5 \times 10^{-7}$  m. The interference fringe are observed on a screen placed 1m. from the slits. The distance between third dark fringe and the seventh dark fringe is equal to :

- (1) 0.65 mm.                    (2) 2.6 mm.  
 (3) 3.25 mm.                    (4) 4.88 mm.

**Q.55** In the circuit shown in figure the maximum output voltage  $V_0$  is



- (1) 0 V                            (2) 5 V  
 (3) 10 V                          (4) 2V

**Q.56** A  $4 \mu\text{F}$  capacitor, a resistance of  $2.5 \text{ M}\Omega$  is in series with 12 V battery. Find the time after which the potential difference across the capacitor is 3 times the potential difference across the resistor.

- [Given  $\ln 2 = 0.693$ ]  
 (1) 13.86 s                      (2) 6.93 s  
 (3) 7 s                              (4) 14 s

**Q.57** The electric field of a plane electromagnetic wave varies with time of amplitude 2V/m propagating along z-axis. The average energy density of the magnetic field is (in  $\text{Jm}^{-3}$ ) :

- (1)  $13.29 \times 10^{-12}$             (2)  $8.86 \times 10^{-12}$   
 (3)  $17.72 \times 10^{-12}$             (4)  $4.43 \times 10^{-12}$

**Q.58** Three masses are placed on the x-axis, 300g at origin, 500 g at  $x = 40$  cm and 400 g at  $x = 70$ cm. The distance of the centre of mass from the origin is :

- (1) 40 cm   (2) 45 cm   (3) 50 cm   (4) 30 cm

SPACE FOR ROUGH WORK



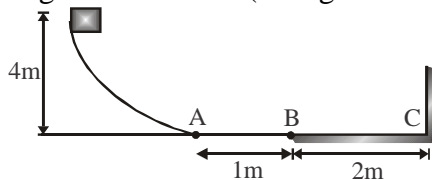
**Q.59** A ball is released from a height of 10 m. If after the impact there is loss of 40% in its energy, the ball shall rise upto-

- (1) 6 m (2) 0.6 m  
(3) 10 m (4) 0.06 m

**Q.60** In S.H.M., let the time period of variation of potential energy be  $T_1$  and time period of variation of position be  $T_2$ , then relation between  $T_1$  &  $T_2$  is

- (1)  $T_1 = T_2$  (2)  $T_1 = 2T_2$   
(3)  $2T_1 = T_2$  (4) None

**Q.61** A block of mass  $m = 0.1$  kg is released from a height of 4 m on a curved smooth surface. On the horizontal surface, path AB is smooth and path BC offers coefficient of friction  $\mu = 0.1$ . If the impact of block with the vertical wall at C be perfectly elastic, the total distance covered by the block on the horizontal surface before coming to rest will be (take  $g = 10 \text{ ms}^{-2}$ )

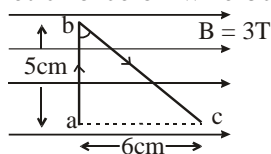


- (1) 29 m (2) 49 m  
(3) 59 m (4) 109 m

**Q.62** 2 kg of ice at  $-20^\circ\text{C}$  is mixed with 5 kg of water at  $20^\circ\text{C}$  in an insulating vessel having a negligible heat capacity. Calculate the final mass of water remaining in the container. It is given that the specific heats of water and ice are 1 kcal/kg per  $^\circ\text{C}$  and 0.5 kcal/kg/ $^\circ\text{C}$  while the latent heat of fusion of ice is 80 kcal/kg :

- (1) 7 kg (2) 6 kg  
(3) 4 kg (4) 2 kg

**Q.63** A conducting angle abc carries a current 5A then magnetic force on wire bc is :



- (1) 0.75 N (2) 2N  
(3) 0.1 N (4) 1N

**Q.64** A small planet is revolving around a very massive star in a circular orbit of radius  $R$  with a period of revolution  $T$ . If the gravitational force between the planet and the star were proportional to  $R^{-5/2}$ , then  $T$  would be proportional to :

- (1)  $R^{3/2}$  (2)  $R^{3/5}$   
(3)  $R^{7/2}$  (4)  $R^{7/4}$

**Q.65** A monoatomic gas is suddenly compressed to  $1/8$  of its volume adiabatically. The ratio of pressure of the gas now to that of its original pressure is :

- (1) 8 times (2) 16 times  
(3) 32 times (4) 128 times

**Q.66** Two short bar magnets of magnetic moments  $m$  each are arranged at the opposite corners of a square of side  $d$  such that their centres coincide with the corners and their axes are parallel. If the like poles are in the same direction, the magnetic induction at any of the other corners of the square is :

- (1)  $\frac{\mu_0 m}{4\pi d^3}$  (2)  $\frac{\mu_0 2m}{4\pi d^3}$   
(3)  $\frac{\mu_0 m}{4\pi 2d^3}$  (4)  $\frac{\mu_0 m^3}{4\pi 2d^3}$

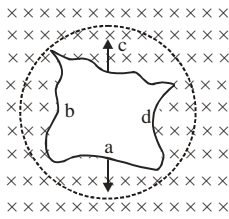
**Q.67** A conducting sphere of radius 10 cm has unknown charge. If the electric field at a distance 20 cm from the centre of the sphere is  $1.2 \times 10^3 \text{ N C}^{-1}$  and points radially inwards. The net charge on the sphere is :

- (1)  $-4.5 \times 10^{-9} \text{ C}$  (2)  $4.5 \times 10^9 \text{ C}$   
(3)  $-5.3 \times 10^{-9} \text{ C}$  (4)  $5.3 \times 10^9 \text{ C}$

**Q.68** A wire of irregular shape turning into a circular shape in a magnetic field which is directed into the paper. The direction of induced current is :

SPACE FOR ROUGH WORK





- (1) along abcda
- (2) along adcba
- (3) into the plane of the paper
- (4) out of the plane of the paper

**Q.69** An  $\alpha$ -particle moves in a circular path of radius 0.83 cm in the presence of a magnetic field of  $0.25 \text{ Wb m}^{-2}$ . The de Broglie wavelength associated with the particle will be

- (1)  $1 \text{ \AA}$
- (2)  $0.1 \text{ \AA}$
- (3)  $10 \text{ \AA}$
- (4)  $0.01 \text{ \AA}$

**Q.70** A tank filled with fresh water has a hole in its bottom and water is flowing out of it. If the size of the hole is increased, then

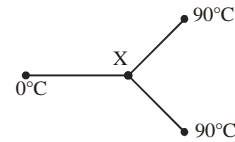
- (1) the volume of water flowing out per second will decrease.
- (2) the velocity of outflow of water remains unchanged.
- (3) the volume of water flowing out per second remains zero.
- (4) Both (2) and (3)

**Q.71** If the velocity  $v$  (in cm/s) of a particle is given in terms of time  $t$  (in sec) by the equation

$$v = at + \frac{b}{t+c}, \text{ then the dimensions of } a, b \text{ and } c \text{ are}$$

- (1)  $a-[L^2], b-[T], c-[LT^2]$
- (2)  $a-[LT^2], b-[LT], c-[L]$
- (3)  $a-[LT^{-2}], b-[L], c-[T]$
- (4)  $a-[L], b-[LT], c-[T^2]$

**Q.72** Three metal rods of the same material and identical in all respects are joined as shown in the figure. The temperatures at the ends are maintained as indicated. Assuming no loss of heat from the curved surfaces of the rods, the temperature at the junction X would be



- (1)  $45^\circ\text{C}$
- (2)  $60^\circ\text{C}$
- (3)  $30^\circ\text{C}$
- (4)  $20^\circ\text{C}$

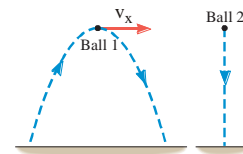
**Q.73** A potentiometer wire of length 100 cm has a resistance of  $10\Omega$ . It is connected in series with a resistance and a cell of emf 2 V and of negligible internal resistance. A source of emf 10mV is balanced against a length of 40 cm of the potentiometer wire. What is the value of external resistance ?

- (1)  $790 \Omega$
- (2)  $890 \Omega$
- (3)  $990 \Omega$
- (4)  $1090 \Omega$

**Q.74** A certain light truck can go around a curve having a radius of 150 m with a maximum speed of 32.0m/s. To have the same acceleration, at what maximum speed can it go around a curve having a radius of 75.0 m?

- (1) 64 m/s
- (2) 45 m/s
- (3) 32 m/s
- (4) 23 m/s

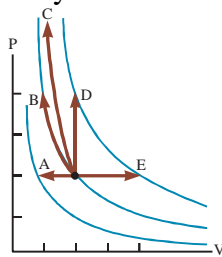
**Q.75** Ball 1 is thrown into the air and it follows the trajectory for projectile motion shown in the drawing. At the instant that ball 1 is at the top of its trajectory, ball 2 is dropped from rest from the same height. Which ball reaches the ground first?



- (1) Ball 1 reaches the ground first, since it is moving at the top of the trajectory, while ball 2 is dropped from rest.
- (2) Ball 2 reaches the ground first, because it has the shorter distance to travel.
- (3) Both balls reach the ground at the same time.
- (4) There is not enough information to tell which ball reaches the ground first.

SPACE FOR ROUGH WORK

- Q.76** A sample of a monatomic ideal gas is contained in a cylinder with a piston. Its state is represented by the dot in the PV diagram shown in Figure. Arrows A through E represent isobaric, isothermal, adiabatic, and isovolumetric processes that the sample can undergo. In each process except D, the volume changes by a factor of 2. All five processes are reversible. Rank the processes according to the change in entropy of the gas from the largest positive value to the largest-magnitude negative value. In your rankings, display any cases of equality.

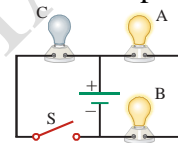


- (1)  $E > D > C > B > A$   
 (2)  $A > B > C > D > E$   
 (3)  $E > D > B > C > A$   
 (4)  $B > C > D > A > E$
- Q.77** A triply ionized beryllium ( $\text{Be}^{3+}$ ) has the same orbital radius as the ground state of hydrogen. Then the quantum state  $n$  of  $\text{Be}^{3+}$  is  
 (1)  $n = 1$  (2)  $n = 2$   
 (3)  $n = 3$  (4)  $n = 4$
- Q.78** In beta plus decay  
 (1) antineutrino is produced with electron.  
 (2) neutrino is produced with positron  
 (3) neutron is produced with electron  
 (4) none of these
- Q.79** A capillary tube of radius  $r$  is immersed in water and water rises in it to a height 'h'. Mass of water in the capillary tube is  $5 \times 10^{-3}$  kg. Another capillary tube of radius ( $r/2$ ) is immersed in water. The mass of water that will rise in this tube is –  
 (1)  $7.5 \times 10^{-3}$  kg (2)  $1 \times 10^{-3}$  kg  
 (3)  $2.5 \times 10^{-3}$  kg (4)  $5 \times 10^{-3}$  kg

- Q.80** A ball of mass  $m$  moving with a horizontal velocity  $v$  strikes the bob of a pendulum at rest. Mass of the bob of the pendulum is also  $m$ . During this collision the ball sticks with the bob of the pendulum. The height to which the combined mass rises ( $g =$  acceleration due to gravity)

- (1)  $v^2/4g$  (2)  $v^2/8g$   
 (3)  $v^2/g$  (4)  $v^2/2g$

- Q.81** A circuit consists of three identical lamps connected to a battery as in Figure. The battery has some internal resistance. The switch  $S$ , originally open, is closed. What then happens to the brightness of lamp  $B$ ?

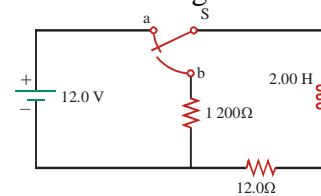


- (1) It increases.  
 (2) It decreases somewhat.  
 (3) It does not change.  
 (4) It drops to zero.

- Q.82** Mutual inductance  $M$  between two concentric circular coils of radii 1 m and 2 m is

- (1)  $\frac{\mu_0 \pi}{2}$  (2)  $\frac{\mu_0 \pi}{4}$   
 (3)  $\frac{\mu_0 \pi}{8}$  (4)  $\frac{\mu_0 \pi}{10}$

- Q.83** In Figure, the switch is left in position a for a long time interval and is then quickly thrown to position b. Rank the magnitudes of the voltages across the four circuit elements a short time thereafter from the largest to the smallest.



- (1)  $\Delta V_L > \Delta V_{1200 \Omega} > 12.0 \text{ V} > \Delta V_{12 \Omega}$   
 (2)  $\Delta V_{1200 \Omega} > \Delta V_L > 12.0 \text{ V} > \Delta V_{12 \Omega}$   
 (3)  $\Delta V_L > \Delta V_{1200 \Omega} > \Delta V_{12 \Omega} > 12.0 \text{ V}$   
 (4)  $\Delta V_{1200 \Omega} > 12.0 \text{ V} > \Delta V_L > \Delta V_{12 \Omega}$

SPACE FOR ROUGH WORK

**Q.84** A sonometer wire has a length of 114 cm, between two fixed ends. Where should two bridges be placed so as to divide the wire into three segments (in cm) whose fundamental frequencies are in the ratio 1 : 3 : 4?

- (1)  $l_1, l_2, l_3 = 18, 24, 72$   
 (2)  $l_1, l_2, l_3 = 24, 18, 72$   
 (3)  $l_1, l_2, l_3 = 72, 18, 24$   
 (4)  $l_1, l_2, l_3 = 72, 24, 18$

**Q.85** The frequency of vibration in a vibration magnetometer of the combination of two bar magnets of magnetic moments  $M_1$  and  $M_2$  is 6 Hz when like poles are tied and it is 2 Hz when the unlike poles are tied together, then the ratio  $M_1 : M_2$  is

- (1) 4 : 5                      (2) 5 : 4  
 (3) 1 : 3                      (4) 3 : 1

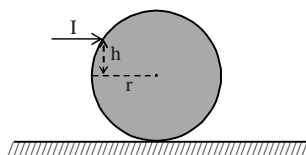
**Q.86** A sound source producing waves of frequency 300Hz and wavelength 1m observer is stationary, while source is going away with the velocity 30 m/s, then apparent frequency heard by the observer is

- (1) 270 Hz                      (2) 275 Hz  
 (3) 383 Hz                      (4) 300 Hz

**Q.87** Angular magnification produced by astronomical telescope for normal adjustment is 10 and length of telescope is 1.1m. The angular magnification when the image is formed at least distance of distinct vision ( $D = 25$  cm) is -

- (1) 14                              (2) 6  
 (3) 16                              (4) 18

**Q.88** A uniform solid sphere of radius  $r$  is placed on a horizontal surface. A horizontal impulse  $I$  is applied on it at a height  $h$  above the center as shown in the figure. If soon after the impact sphere starts rolling (without slipping) the ratio of  $h/r$  is:



SPACE FOR ROUGH WORK

- (1) 1/2                              (2) 1/5  
 (3) 2/5                              (4) 1/4

**Q.89** An engine has an efficiency of 0.25 when temperature of sink is reduced by  $58^\circ\text{C}$ , if its efficiency is doubled, then the temperature of the source is :

- (1)  $150^\circ\text{C}$                       (2)  $222^\circ\text{C}$   
 (3)  $242^\circ\text{C}$                       (4)  $232^\circ\text{C}$

**Q.90** 4<sup>th</sup> harmonic of an open organ pipe has frequency 33 Hz lesser than 5<sup>th</sup> harmonic of same open organ pipe. Find the length of the pipe (in meters). (Assume velocity of sound in air = 330 m/s. Neglect end correction.)

- (1) 5                                      (2) 4  
 (3) 3                                      (4) 2

### PART C – BIOLOGY

**Q.91** Which statement in given question is correct ?

- (1) For a detailed evaluation of the hearts function, multiple leads are attached to the chest region.  
 (2) To obtain standard ECG, multiple leads are attached to chest region.  
 (3) QRS complex represents repolarisation of ventricle.  
 (4) pip\_pip\_peepee sound in electrocardiogram shows that person goes in heart failure.

**Q.92** The egg apparatus consists of .. ...(a)..... antipodals and .....(b)..... egg cell :

- (1) a – One, b – One    (2) a – Two, b – Two  
 (3) a – Three, b – One    (4) a – One, b – Two

**Q.93** In flowering plants fertilization occurs in :

- (1) Ovary                              (2) Embryosac  
 (3) Nucellus                              (4) Ovule

**Q.94** Identify the correct matching option :

- | Disease          | Symptom                    |
|------------------|----------------------------|
| (1) Arthritis    | Inflammation of cartilages |
| (2) Osteoporosis | Age related disorder due   |

- (3) Gout to deficiency of estrogen  
Joints inflamed due to antigens.
- (4) Fracture Destruction of tendons & ligaments.

**Q.95** Match the column

- |              |                  |
|--------------|------------------|
| (a) Virus    | (i) Schwann      |
| (b) Viroid   | (ii) T.O. diener |
| (c) Cell     | (iii) Pasteur    |
| (d) Ribosome | (iv) Palade      |

- (1) a-iii, b-ii, c-i, d-iv (2) a-ii, b-i, c-iv, d-iii  
(3) a-i, b-ii, c-iii, d-iv (4) a-iv, b-iii, c-i, d-ii

**Q.96** Which of the following statement is not correct

- (1) In translation, amino acids are added one by one, translated into polypeptide sequences dictated by DNA and represented by m-RNA.
- (2) Lac operator is present only in the lac operon and it interact specifically with lac repressor only.
- (3) UTR (Untranslated regions) are present at both 5' end (before start codon) and at 3' end (after stop codon).
- (4) In eukaryotes, control of the rate of transcriptional initiation is the predominant site for control of gene expression.

**Q.97** Which of the following is natural and true product of bee keeping ?

- (1) Pollen (2) Honey  
(3) Wax (4) Both (2) and (3)

**Q.98** When faeces are retained with in the rectum as bowel movements occur irregularly, it is called

- (1) Diarrhoea (2) Vomiting  
(3) Constipation (4) Jaundice

**Q.99** Sympathetic nervous system is not related to -

- (1) Tachycardia (2) Bronchodilation  
(3) Constriction of pupil (4) Ejaculation

**Q.100** Type of fertilization in Chondrichthyes and Osteichthyes is\_\_\_\_\_

- (1) External and internal  
(2) Internal and external  
(3) Internal only

(4) External only

**Q.101** Mark correct statements :

- (a) Four haploid cells are formed at the end of meiosis-II
- (2) In E. coli, to complete cell cycle it takes about 90 minutes.
- (3) Inner mitochondrial membrane forms infoldings called cristae
- (4) Interphase is the phase between two successive M-phase

- (1) Only d (2) a, c & d  
(3) Only b (4) All are correct


**Q.102** Auxin was first isolated from

- (1) Human urine (2) Callus  
(3) Coconut milk (4) None

**Q.103** Which of the following type of classification based on evolutionary relationship between the various organism :

- (1) Natural classification  
(2) Phylogenetic classification  
(3) Phenetic classification  
(4) Artificial classification

**Q.104** The plant which have this floral diagram possess?



- (a) Papilionaceous corolla  
(b) Swollen placenta  
(c) Epipetalous condition  
(d) Epiphyllous condition
- (1) a, b, c, d (2) a, b  
(3) b, c (4) b, c, d

**Q.105** Select the correct statement :

- (1) Gymnosperm are both homosporous and heterosporous
- (2) *Marsilea*, *Ginkgo* and *Pinus* all are gymnosperms

SPACE FOR ROUGH WORK

- (3) The leaves of gymnosperms are not well adapted to extremes of climate  
 (4) *Sequoia* is known as father of forest
- Q.106** Which of the following statement is incorrect regarding parturition :
- (1) Parturition is a complex neuro-endocrine mechanism.  
 (2) Estrogen and progesterone ratio decreases.  
 (3) Oxytocin is the main parturition hormone.  
 (4) Foetal ejection reflex generates.
- Q.107** 200 million year ago some reptiles went back into water to evolve into fish like reptiles. These were probably:
- (1) *Ichthyosaurus* (2) *Tyrannosaurus*  
 (3) *Pteranodon* (4) *Stegosaurus*
- Q.108** "Erythropoietin" hormone related to :
- (1) Blood pressure  
 (2) Formation of R.B.C  
 (3) Water level of blood  
 (4) Glucose level of blood
- Q.109** Which of the following cross is utilized to know the location of gene ?
- (1) Test cross (2) Out cross  
 (3) Inbreeding (4) Reciprocal cross
- Q.110** If the vagus nerves (main nerves of the parasympathetic nervous system) were cut, which of the following would not be true ?
- (1) The heart would stop beating  
 (2) The diaphragm would be paralysed  
 (3) Adrenaline secretion by the adrenal gland would cease  
 (4) None of (1), (2) and (3)
- Q.111** Read the following (a-d) statements :
- (a) Connective tissue are most abundant and widely distributed in the body of complex organism.  
 (b) Connective tissue helps in linking and supporting other tissue or organs in of the body.  
 (c) Adipose tissue is a type of dense connective tissue.  
 (d) Connective tissue does not secrete its matrix.
- Choose the incorrect statements is :
- (1) a, c & d (2) a and b  
 (3) c and d (4) Only d
- Q.112** The person with 'O+' blood group, who was seriously injured during an accident, can receive the blood of following individual :-
- (1) AB<sup>+</sup> (2) O<sup>-</sup>  
 (3) B<sup>-</sup> (4) All of the above
- Q.113** If the circular ciliary muscles of the eye are unable to contract, the
- (1) Lens will become more convex.  
 (2) Lens will be thin and stretched.  
 (3) Vision will be lost completely.  
 (4) Bright light will have no adverse effect on retina
- Q.114** Ecology at the organism level is essentially called :
- (1) Morphological ecology  
 (2) Physiological ecology  
 (3) Anatomical ecology  
 (4) Behavioral ecology
- Q.115** Which statement is incorrect regarding cockroach?
- (1) I & III spiracle are permanently open  
 (2) Anal cerci are present only in male  
 (3) In females, 7<sup>th</sup> sternum is boat shaped  
 (4) Each compound eye has 2000 ommatidia
- Q.116** The rate of new carbon material formed by heterotrophs is called :
- (1) GPP (2) NPP  
 (3) NCP (4) Secondary productivity
- Q.117** The permease of the lac operon is synthesised :
- (1) constitutively from the i gene  
 (2) only when required from the i gene  
 (3) constitutively from the y gene  
 (4) only when required from the y gene
- Q.118** Deuteromycetes are known as fungi imperfecti because –
- (1) their zygote undergoes meroblastic and holoblastic cleavage.  
 (2) only asexual stages are known.  
 (3) they have aseptate mycelium.  
 (4) they are autotrophic.

SPACE FOR ROUGH WORK

**Q.119** Which of the following will be least adversely affected by competition ?

- (1) Grass (2) Rabbit  
(3) Deer (4) Lion

**Q.120** Select the correct match :

- (1) Denitrification - *nitrobacter*  
(2) Photoautotroph - *nitrococcus*  
(3) Necrosis - N, P, K, S  
(4) Delay in flowering - Mo, S, N

**Q.121** Read following statements.

- (a) Human leucocyte antigen is present on leucocytes only.  
(b) Alleles for expression of human leucocyte antigen are present on chromosome no. 6.  
(c) Human leucocyte antigen is present only on RBC surface.  
(d) Human leucocyte antigen mismatching is major reason for allograft rejection.  
(e) Allograft rejection is due to cell mediated immunity.

- (1) a, b, c are correct (2) a, c, d are correct  
(3) a, b, e are correct (4) b, d, e are correct

**Q.122** Occurrence of triploid (3n) primary endosperm nucleus is a characteristic feature of –

- (1) algae (2) gymnosperms  
(3) angiosperms (4) bryophytes.

**Q.123** Which of the following statement is correct ?

- (1) Brown algae posses chlorophyll a,b carotenoids, and xanthophyll.  
(2) Majority of red algae are fresh water.  
(3) Volvox, Fucus, Ulothrix are green algae.  
(4) Sexual Reproduction may be isogamous, anisogamous or oogamous in brown algae.

**Q.124** Which group of animals can respire through skin ?

- (1) Pisces (2) Amphibia  
(3) Reptelia (4) Aves

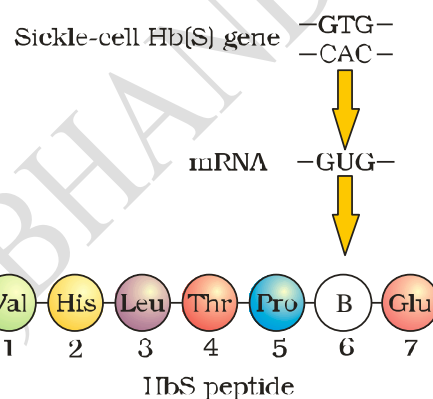
**Q.125** Which of following is a hydrogen carrier ?

- (1) UQ (2) Cyt b  
(3) Cyt C (4) Cyt C<sub>1</sub>

**Q.126** Which of the following known as seed fern :

- (1) Cycadofillicales (2) Cycadales  
(3) Coniferales (4) Gnetales

**Q.127** Which of the following is true for given diagram



- (1) A → Autosomal dominant  
(2) B → Glutamic acid  
(3) B → Valine  
(4) It is caused due to bacteria

**Q.128** The amino acid attaches to the tRNA at its :

- (1) 5' end (2) Anticodon site  
(3) 3' end (4) DHU loop

**Q.129** When resource in habitat are unlimited, growth have?

- (1) Sigmoid growth curve (2) J-shape growth curve  
(3) Logistic growth curve (4) Both 1 and 3

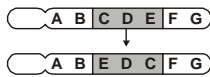
**Q.130** Identify the disease according to given points :

- (a) Sustained high fever (b) Weakness  
(c) Headache (d) Loss of appetite  
(1) Ascariasis (2) Amoebiasis  
(3) Typhoid (4) Cholera

**Q.131** The diagram shown compares a normal chromosome with one that has undergone a rearrangement. The rearrangement is BEST described as a/an

SPACE FOR ROUGH WORK





- (1) deletion (2) duplication  
(3) nondisjunction (4) inversion

**Q.132** Which DNA technique depends, in part, on a violation of Mendel's law of independent assortment?

- (1) Shotgun genome sequencing  
(2) RFLP  
(3) PCR  
(4) Genome marker mapping

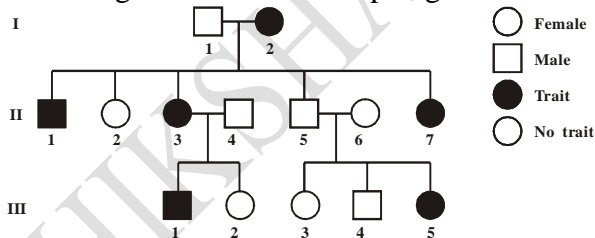
**Q.133** Which of these is/are responsible for an increase in the thickness of a plant?

- I. Apical meristem II. Vascular cambium  
III. Cork cambium  
(1) I only (2) II only  
(3) III only (4) II and III

**Q.134** Which correctly describes a process or event in the female reproductive cycle?

- (1) The cycle is regulated via a negative feedback loop.  
(2) The corpus luteum releases an egg into a fallopian tube.  
(3) Estrogen and progesterone cause a follicle to mature.  
(4) A maturing follicle causes the uterine lining to build up.

**Q.135** Researchers tracked the incidence of a single-gene trait in a family. A single allele can mask the phenotype of the allele for this trait. Their findings are shown in the pedigree below.



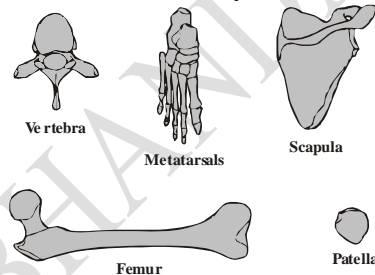
According to the pedigree, what is the most likely genotype of individual III-5?

- (1) Carrier  
(2) Unaffected  
(3) Homozygous recessive  
(4) Homozygous dominant

**Q.136** Cyanobacteria are photosynthetic prokaryotes. Which organelles do cyanobacteria cells contain?

- I. Chloroplasts II. Nucleus  
III. Ribosomes  
(1) I only (2) II only  
(3) III only (4) I and II only

**Q.137** Which of the following plays an important role in the human immune system?



- (1) Femur (2) Metatarsals  
(3) Patella (4) Scapula

**Q.138** How does the ATP synthase enzyme function in the cell?

- (1) It uses energy to move ions against their concentration gradient by removing a phosphate group from ATP.  
(2) It uses the power of ions moving against their concentration gradient to add a phosphate group to ADP.  
(3) It uses the power of ions moving down their concentration gradient to add a phosphate group to ADP.  
(4) It uses the power of ions moving against their concentration gradient to remove a phosphate group from ATP.

**Q.139** Which choice matches each description below to the correct stage of aerobic respiration?

- I. Produces most of the ATP  
II. Produces carbon dioxide (CO<sub>2</sub>)  
III. Uses oxygen (O<sub>2</sub>)  
(1) I = chemiosmosis; II = electron transport chain; III = citric acid cycle  
(2) I = chemiosmosis; II = citric acid cycle; III = electron transport chain.  
(3) I = citric acid cycle; II = chemiosmosis; III = electron transport chain.

SPACE FOR ROUGH WORK



- (4) I = electron transport chain;  
II = chemiosmosis; III = citric acid cycle

**Q.140** All of the following take place in the thylakoid of the chloroplast EXCEPT

- (1)  $\text{NADP}^+$  is reduced to create NADPH.
- (2) hydrogen ions are pumped against their concentration gradient.
- (3) ATP is produced by the ATP synthase enzyme
- (4) carbon dioxide molecules are converted to a three-carbon sugar

**Q.141** How did the results of the Urey-Miller experiment affect the Oparin hypothesis?

- (1) The results supported the Oparin hypothesis by showing that organisms contributed to the composition of Earth's present-day atmosphere.
- (2) The results contradicted the Oparin hypothesis by showing that Earth's early atmosphere could not produce cells from organic molecules.
- (3) The results supported the Oparin hypothesis by showing that replicating membranes could form from simple molecular precursors.
- (4) The results supported the Oparin hypothesis by showing that biological molecules could form in conditions resembling the early Earth.

**Q.142** Which of these describes an adaptation to an arid environment?

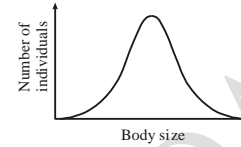
- (1) A short loop of Henle, which allows more filtrate to be removed from the blood.
- (2) A short loop of Henle, which allows less water to be removed from the filtrate.
- (3) A long loop of Henle, which allows more filtrate to be removed from the blood.
- (4) A long loop of Henle, which allows more water to be removed from the filtrate.

**Q.143**  $\text{C}_4$  plants have better productivity because –

- (1)  $\text{C}_4$  plants absorb more light
- (2)  $\text{C}_4$  plants absorb more  $\text{CO}_2$

- (3)  $\text{C}_4$  plants does not carry photorespiration
- (4)  $\text{C}_4$  plants have more amount of RuBisCO.

**Q.144** The graph shows the body size distribution in a population.



Which statement describes the effects of stabilizing selection on the distribution?

- (1) The mean shifts, and the curve remains the same.
- (2) The mean shifts, and the curve becomes narrower.
- (3) The mean remains the same, and the curve becomes wider.
- (4) The mean remains the same, and the curve becomes narrower.

**Q.145** Which of the following plant growth regulators (PGRs) promotes root initiation, flowering and induced parthenocarpy?

- (1) Gibberellin
- (2) Auxin
- (3) Cytokinin
- (4) Ethylene

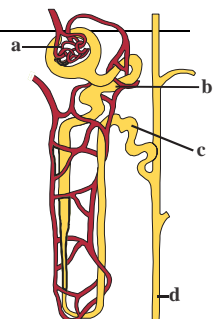
**Q.146** The chemiosmotic coupling hypothesis of oxidative phosphorylation proposes that adenosine triphosphate (ATP) is formed because –

- (1) a proton gradient forms across the inner mitochondrial membrane.
- (2) there is a change in the permeability of the inner mitochondrial membrane towards adenosine diphosphate (ADP).
- (3) high energy bonds are formed in mitochondrial proteins.
- (4) ADP is pumped out of the matrix into the intermembrane space.

**Q.147** Hiccups can be best described as

- (1) forceful sudden expiration.
- (2) forceful contraction of intercostal muscles during deep breathing.
- (3) vibration of the soft palate during breathing while sleeping.

SPACE FOR ROUGH WORK



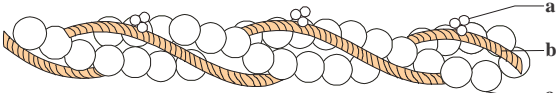
(4) jerky incomplete inspiration.

**Q.148** Refer the given figure of nephron.

Identify a, b, c and d and select the correct option regarding them

- (1) a-Glomerulus - a tuft of capillaries formed by afferent arteriole.
- (2) b-PCT-reabsorption of  $\text{HCO}_3^-$  and selective secretion of  $\text{H}^+$  and  $\text{K}^+$  occurs here.
- (3) c-DCT-almost all glucose, amino acids, water,  $\text{Na}^+$ ,  $\text{K}^+$  and uric acid are absorbed here.
- (4) d-collecting duct-extends from the cortex of the kidney to the inner parts of medulla. Large amount of water is secreted in this region.

**Q.149** Select the correct option regarding a, b and c.



- (1) a-Tropomyosin-runs close to F-actin throughout its length.
- (2) b- Troponin-complex protein distributed at regular interval of tropomyosin.
- (3) c-F actin - polymer of monomeric G-actin helically bound to each other.
- (4) None of these

**Q.150** Select the correct statement about hormones and their actions.

- (1) Parathyroid hormone increases  $\text{K}^+$  absorption of the body.
- (2) Insulin and glucagon helps to maintain blood sugar levels.
- (3) Old aged people have weak immunity due to increased activity of thymus.
- (4) Osteoporosis in women occurs due to increased levels of oestrogens.

**Q.151** After double fertilisation, a mature ovule has

- (1) 1 diploid and 1 haploid cell
- (2) 1 diploid and 1 triploid cell
- (3) 2 haploid and 1 triploid cell
- (4) 1 haploid and 1 triploid cell.

**Q.152** Match column I with column II and select the correct option from the given codes.

Column I	Column II
a. Parthenocarpy	(i) Seed formation without fertilisation.
b. Polyembryony	(ii) More than one embryo in same seed.
c. Apomixis	(iii) Seedless fruits without fertilisation.
d. Somatic	(iv) Embryo develops from a embryogenesis somatic cell.

- (1) a - (iv), b - (ii), c - (iii), d - (i)
- (2) a - (iii), b - (ii), c - (i), d - (iv)
- (3) a - (i), b - (iv), c - (iii), d - (ii)
- (4) a - (ii), b - (iii), c - (i), d - (iv)

**Q.153** Which of the following contraceptive devices make uterus unsuitable for implantation?

- (1) Progestasert
- (2) CuT
- (3) Lippe's loop
- (4) Multiload

**Q.154** Which of the following statements is correct regarding menstrual cycle?

- (1) LH induces rupturing of Graafian follicle.
- (2) Proliferative phase is characterised by the increased production of progesterone.
- (3) Corpus luteum secretes large amount of estrogen.
- (4) Both LH and FSH attain a peak level in secretory phase.

**Q.155** Select the correct sequence for *Homo erectus*.

- (1) *Erectus* → *homo* → primata → chordata → animalia
- (2) *Homo* → *erectus* → primata → animalia → chordata
- (3) *Homo* → *erectus* → primata → chordata → animalia
- (4) *Erectus* → *homo* → animalia → primata → chordata

**Q.156** Which one of the following immune system components does not correctly match with its respective role?

- (1) Interferons - secreted by virus-infected cells and protect non-infected cells from further viral infection.
- (2) B-lymphocytes-produces antibodies in response to pathogens into blood to fight with them.
- (3) Macrophages-mucus secreting cells that trap microbes entering in the body
- (4) IgA-present in colostrum in early days of lactation and protect infant from diseases.

**Q.157** Albuminous seeds are found in-

- (1) Pea, Groundnut, Castor
- (2) Castor, Sunflower, Barley
- (3) Wheat, Barley, Castor
- (4) Pea, Groundnut, Sunflower

**Q.158** Which of the following statements is not true?

- (1) The biodiversity decreases with increasing latitude.
- (2) The biodiversity decreases with increasing altitude.
- (3) The fishes show greatest biodiversity among vertebrates.
- (4) The biodiversity of bryophytes is greater than that of angiosperms.

**Q.159** Match the following and select the correct option.

**Column- I**

a. Emphysema

b. ADA deficiency

c. Eutrophication

d. Biomagnification

**Column-II**

(i) Increase in the concentration of non-biodegradable substances in food chains

(ii)  $\alpha$ -1 antitrypsin

(iii) Bone marrow  $\infty$  transplantation

(iv) Nutrient enrichment of a water body.

- (1) a - (iii), b - (ii), c - (iv), d - (i)
- (2) a - (ii), b - (iii), c - (iv), d - (i)
- (3) a - (ii), b - (iv), c - (i), d - (iii)
- (4) a - (iv), b - (ii), c - (iii), d - (i)

**Q.160** One greenhouse gas contributes 14% to total global warming and another contributes 6%. These are respectively identified as -

- (1)  $N_2O$  and  $CO_2$
- (2) CFCs and  $N_2O$
- (3) methane and  $CO_2$
- (4) methane and CFCs.

**Q.161** Which of the following microbes is correctly paired with its function?

- (1) *Aspergillus niger* - Production of lactic acid
- (2) *Trichoderma polysporum* - Lowers blood cholesterol
- (3) *Saccharomyces cerevisiae* - Production of citric acid
- (4) Methanogenic bacteria-Gobar gas formation

**Q.162** Which of the following antibiotics is not correctly matched with the source from which it is obtained?

Antibiotic	Source
(1) Penicillin	<i>Penicillium chrysogenum</i>
(2) Bacitracin	<i>Bacillus licheniformis</i>
(3) Griseofulvin	<i>Penicillium griseofulvum</i>
(4) Streptomycin	<i>Bacillus griseus</i>

**Q.163** The products of oxidative phosphorylation are

- (1) oxygen and water
- (2) NADH and ATP.
- (3) pyruvate and NADPH.
- (4) water and ATP

**Q.164** Respiratory organs of whale are

- (1) Book lungs
- (2) Lungs
- (3) Gills
- (4) Skin

**Q.165** Characteristic of birds is -

- (1) Unisexual and sexual dimorphism absent
- (2) Bisexual and sexual dimorphism absent
- (3) Unisexual and sexual dimorphism present
- (4) Bisexual and sexual dimorphism present

**Q.166** At which stage of the cell cycle are histone proteins synthesized in a eukaryotic cell?

- (1) During telophase
- (2) During S-phase
- (3) During  $G_2$ -stage of prophase
- (4) During entire prophase

**Q.167** Which of the following genera is associated with coralloid roots?

- (1) *Cycas*
- (2) *Taxus*

SPACE FOR ROUGH WORK



- a. *Pteris* (i) Gymnosperm  
b. *Cycas* (ii) Bryophyte  
c. *Sphagnum* (iii) Algae  
d. *Sargassum* (iv) Pteridophyta
- (1) a - (iv), b - (ii), c - (i), d - (iii)  
(2) a - (iv), b - (i), c - (ii), d - (iii)  
(3) a - (ii), b - (iii), c - (iv), d - (i)  
(4) a - (i), b - (iv), c - (iii), d - (ii)

- Q.180** Select one of the following pairs of important features distinguishing *Gnetum* from *Cycas* and *Pinus* and showing affinities with angiosperms.
- (1) Perianth and no integuments.  
(2) Embryo development and apical meristem.  
(3) Absence of resin duct and leaf venation.  
(4) Presence of vessel elements and absence of archegonia.

SPACE FOR ROUGH WORK

# BECOME AN ACE IN JEE & NEET



**SHIKSHA CLASSES**  
Believe & Achieve

**JEE | NEET | Previde (8-10)**

☎ 8625055707 | 8623085707    🌐 shikshaclasses.co.in

M-19, MHADA Colony, Khat Road, Bhandara

Learn with Jaiswal sir



SPACE FOR ROUGH WORK